







Year 4 – Decimals #1 writing tenths

Complete the missing gaps in the table

| Diagram | Fraction | Decimal |
|--|-----------------|---------|
|  | $\frac{1}{10}$ | 0.1 |
|  | $\frac{3}{10}$ | 0.3 |
|  | $\frac{5}{10}$ | 0.5 |
|  | $\frac{6}{10}$ | 0.6 |
|  | $\frac{9}{10}$ | 0.9 |
|  | $\frac{10}{10}$ | 1.0 |

