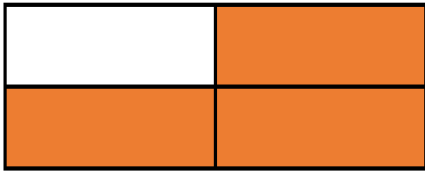


Non Unit and Unit fractions

1



Circle the fraction that has been represented.

$$\frac{3}{4}$$

$$\frac{4}{3}$$

$$\frac{4}{1}$$

$$\frac{2}{3}$$

$$\frac{3}{1}$$

$$\frac{1}{2}$$

2



Match the fraction to its equal representation.

Four out of twelve equal parts
$\frac{4}{7}$
Two thirds
$\frac{3}{4}$

A.	
B.	
C.	
D.	

3

Find the odd one out in the fractions.



4