
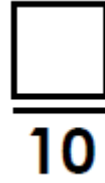
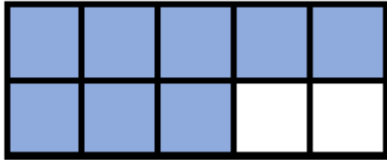
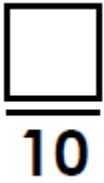


Solve the problems

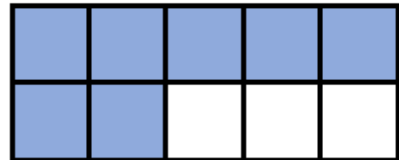
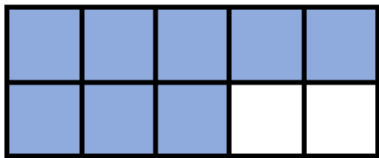
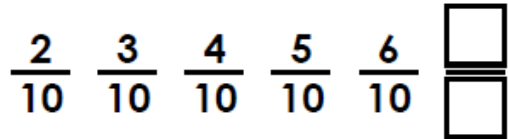
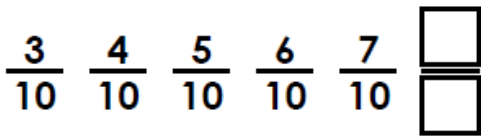
1

Write the fraction shown below?



2

Count in tenths to complete the sequence.



3

Elsie says... Is she correct?



$\frac{3}{10}$ more than $\frac{3}{10}$
is $\frac{5}{10}$.

