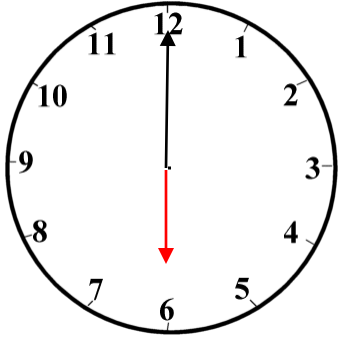
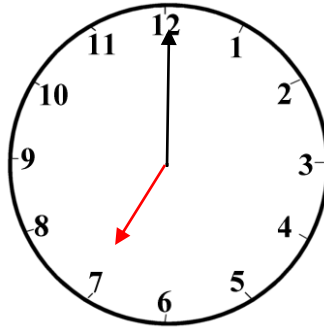


Time lesson 1 Answers

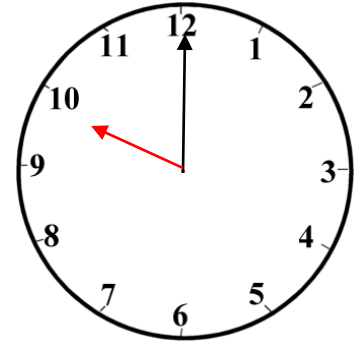
What Time is it?



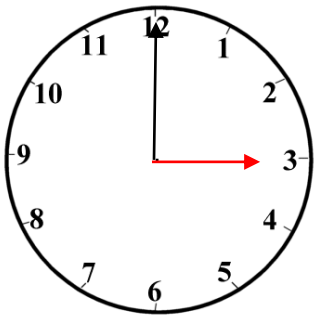
6 o'clock



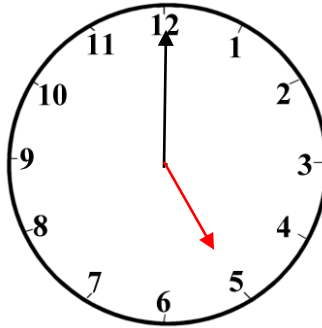
7 o'clock



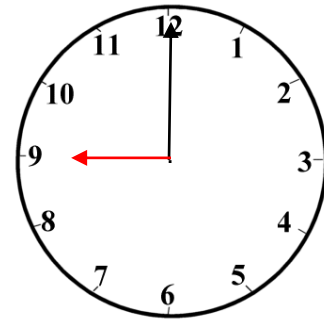
10 o'clock



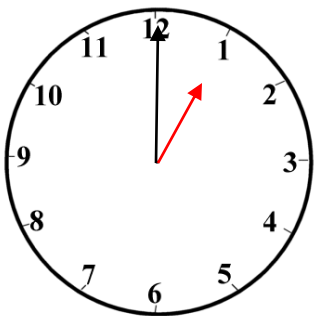
3 o'clock



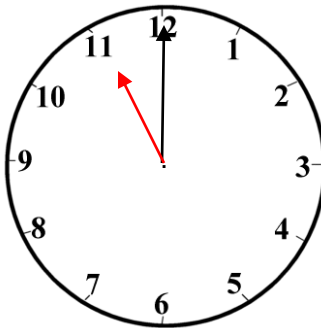
5 o'clock



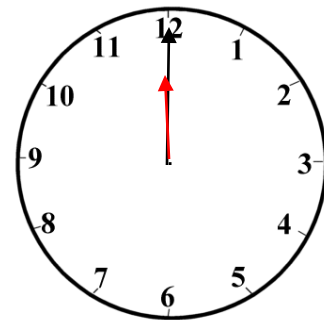
9 o'clock



1 o'clock



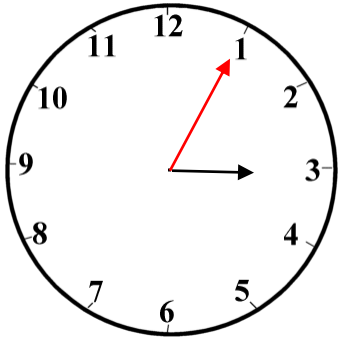
11 o'clock



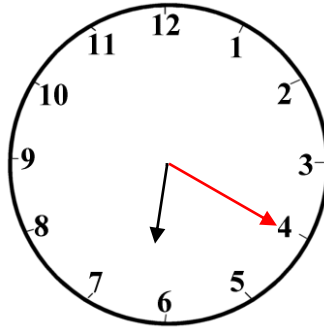
12 o'clock

Time lesson 2 Answers

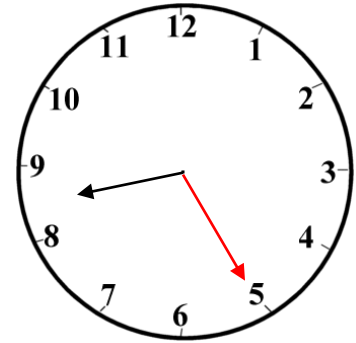
Telling the Time



5 minutes past 3

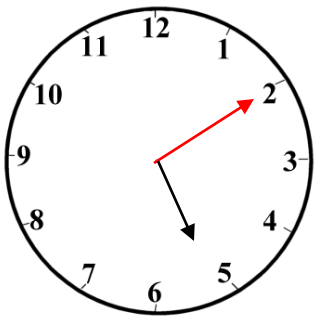


20 minutes past 6

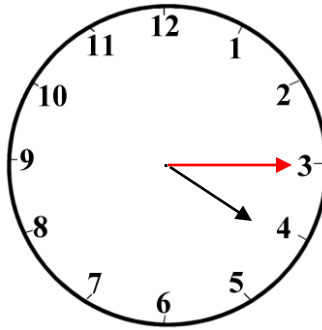


25 minutes past 8

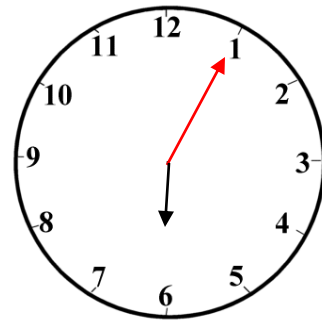
Draw the hands on the remaining clocks



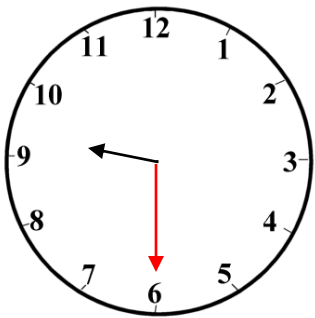
10 minutes past 5



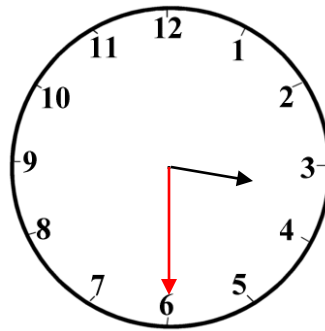
15 minutes past 4



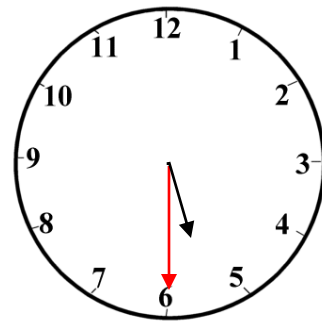
5 minutes past 6



Half past 9



Half past 3



Half past 5

Telling the Time Half-Past Onwards Answers

Underneath each clock, write the time shown.



E.g. 10 minutes to 2.



9 o'clock.



5 minutes to 12.



10 minutes to 4.



25 minutes to 8.



20 minutes to 12.



5 minutes to 1.



Quarter to 10.



25 minutes to 12.

Answers



3 o'clock



5 past 9



20 to 1



12 o'clock



half past 7



25 past 8



5 past 5



quarter past 2



6 o'clock



5 to 10



20 to 11



11 o'clock



10 past 12



10 to 7



quarter to 8



5 o'clock



25 to 2



quarter to 3

Answers



9 o'clock



half past 3



10 to 5



25 past 4



quarter past 2



half past 12



20 to 11



3 o'clock



half past 9



25 to 5



quarter to 1



10 to 7



quarter to 8



10 o'clock



half past 6



25 to 1



half past 7



quarter past 8