


Year 2 —Geometry.
Lesson 6—turning shapes.

How has the red arrow been turned to get to the blue arrow?

1




A quarter turn anticlockwise or a three quarter turn clockwise

2



A half turn clockwise or half a turn anti-clockwise


3



A three quarter turn clockwise or a quarter turn anti-clockwise

Complete the turns.

Turn the bee half a turn clockwise



Turn the bee a three quarter turn anti-clockwise.

