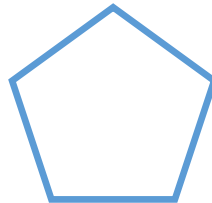



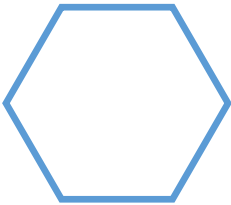
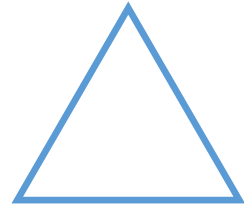


Look at all the shapes below. How could you sort them? Think about the vertices, the sides, the types of sides and lines of symmetry. How many different ways can you find?



There is not one answer for this task—you may have sorted them in lots of different ways.

For example you may have sorted the shapes into those with a line of symmetry and those without.

You may have sorted them into those with curved sides and those with straight sides.