


## Year 2 – Section review - Measures




### Question 1



Which is heavier the **red** cube or the **green** cube?

### Question 2



The **pink** ball weighs the same as \_\_\_\_\_ **orange** balls.

If the pink ball weighs 14g. How much does 1 orange ball weigh?

### Question 3

Circle the object that you would most likely measure in KG.

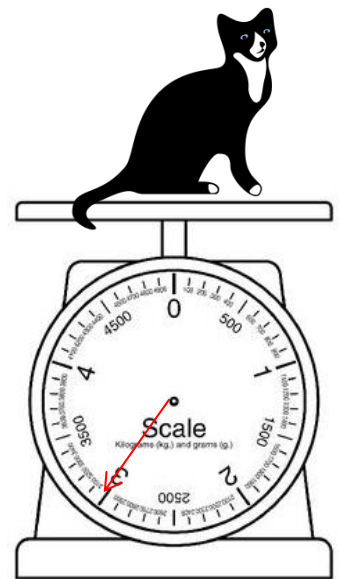
A book

A pen

A puppy

### Question 4

How heavy is the cat in kilograms?



### Question 5

Draw a line on the scale to show 55g.

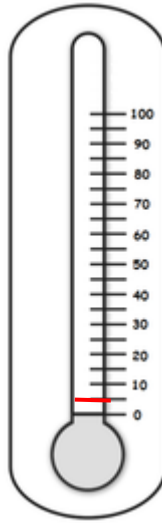
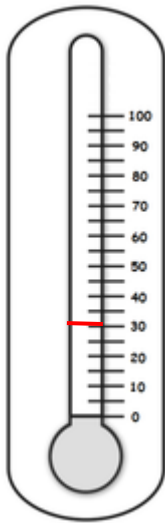


### Question 6

One thermometer shows the temperature in July in England.

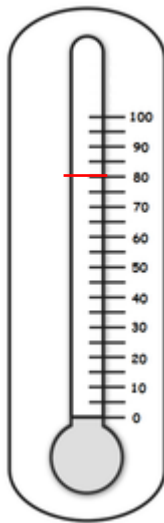
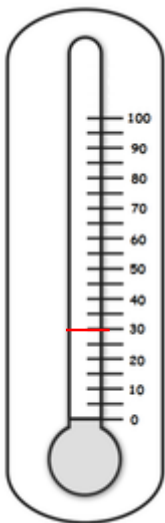
One thermometer shows the temperature in December in England.

Label the two thermometers.



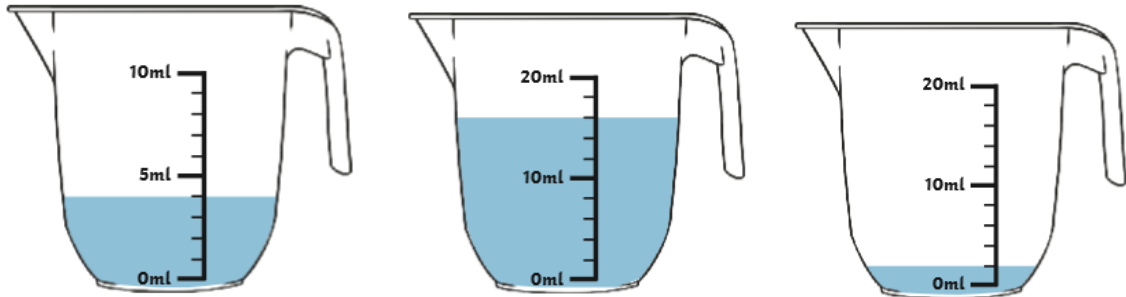
### Question 7

What is the difference in temperature between the two thermometers?



### Question 8

How much water is in these jugs?



### Question 9

The two scales below show the weight of Sam's two pet hamsters. Which hamster is heavier? \_\_\_\_\_

Bill



Ben



### Question 10

What is the difference between Bill and Ben's weights?