


Year 1 — Multiplication
Lesson 3 counting equal groups

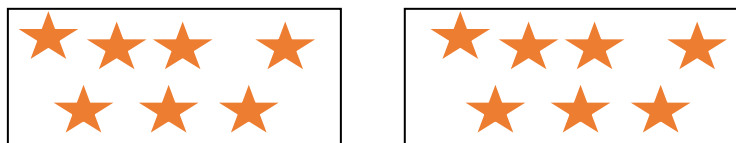
Task 1— fill in the missing gaps.

1




There are ___ groups.
There are ___ in each group.
There are ___ groups of ____.
___ groups of ___ equals ____.
There are ___ dots in total.

2



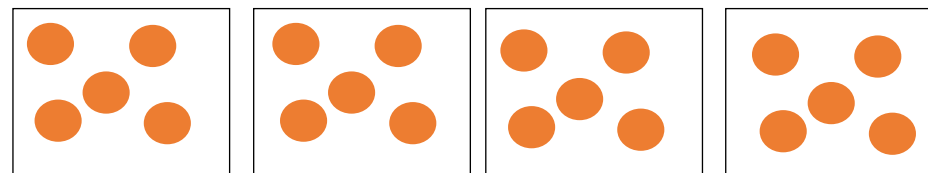
There are ___ groups.
There are ___ in each group.
There are ___ groups of ____.
___ groups of ___ equals ____.
There are ___ stars in total.

3



There is ___ group.
There are ___ in this group.
There is ___ group of ____.
___ group of ___ equals ____.
There are ___ suns in total.

Task 2— Can you spot the mistake and explain?



There are 5 groups.
There are 5 in each group.
There are 5 groups of 5.
5 groups of 5 equals 20.
There are 20 dots in total.