


Year 2— Statistics #7 answering questions about bar charts and pictograms

A pictogram to show the number of trains I saw each day


	Key = 1 train
--	------------------





Day	Tally
Thursday	
Friday	
Saturday	
Sunday	

On what day did I see the most trains? _____

What is the total amount of trains I saw? _____

A pictogram to show the number of pancakes each child ate

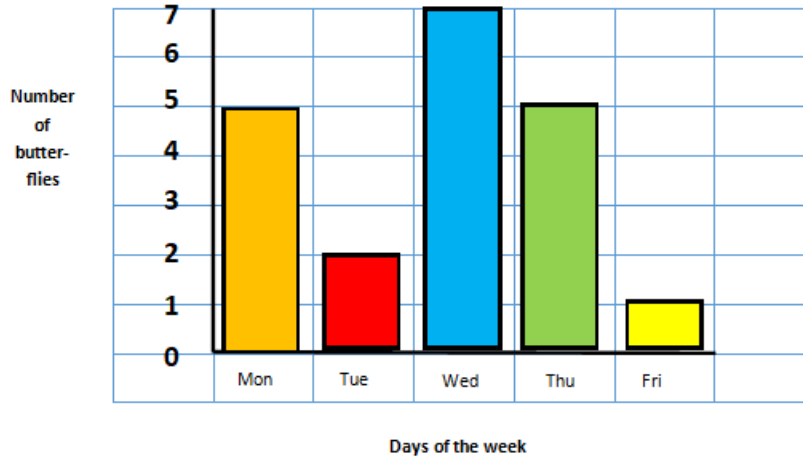
	Key = 1 pancake
---	--------------------

Day	Tally
Mary	
John	
Amy	
Pete	

What is the difference between the amount of pancakes Pete ate and the amount Amy ate? _____

Who ate the second most amount of pancakes? _____

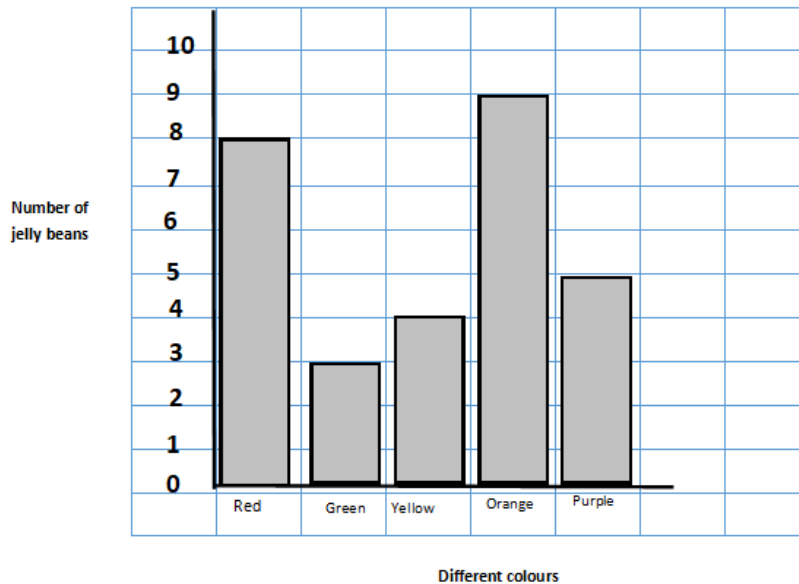
A bar chart to show the number of butterflies I saw on each day.



Which day did I see the least amount of butterflies? _____

How many butterflies did I see on Monday and Tuesday? _____

A bar chart to show the number of different coloured jelly beans in a pack



Which sweet was the most popular? _____

What is the difference between the number of red and the number of green jelly beans?