


Year 1 — Division Session 5
Sharing by using pictures


Task 1
Can you count as you share between the group?

Can you share 10 fairly between 5 groups?



There are in each group.

Can you share 15 fairly between 3 groups?



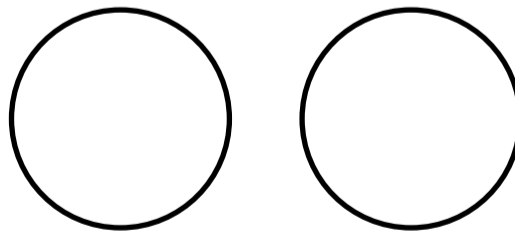
There are in each group.

Task 2
Can you solve the word problem by sharing fairly?

I have 14 sweets.
I want to share them between by 2 friends.
How many sweets will each friend have?



Each friend will have




Task 3: I have 18 roses.
I want to share them between my 3 friends.
How many roses will each friend have?

Lee says...

"Each friend will have 3 roses."

Tom says...

"Each friend will have 6 roses."



I agree with _____ because _____