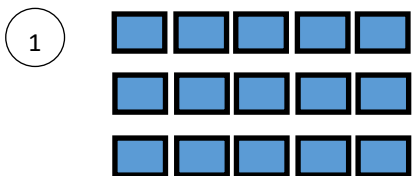



Year 1 — Multiplication

Lesson 4 making equal rows—arrays

Task 1— fill in the missing gaps.




There are ___ rows.
There are ___ in each row.
There are ___ rows of ____.
There are ___ altogether.



There are ___ rows.
There are ___ in each row.
There are ___ rows of ____.
There are ___ altogether.



There is ___ row.
There is ___ in each row.
There is ___ row of ____.
There are ___ altogether.



There are ___ rows.
There are ___ in each row.
There are ___ rows of ____.
There are ___ altogether.

Task 2— spot the mistake

Why is this not an array?

